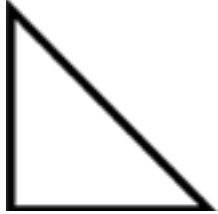


45-45-90 Video Guide

Name _____

First, using the triangle shown here, fill in the special relationship the sides of a 45-45-90 triangle have.




Now, for each video you watch, fill in the problem and the solution for at least one of the examples presented.

Video 1

Problem:



Solution:




Video 2

Problem:




Solution:

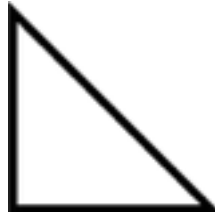


Video 3

Problem:




Solution:

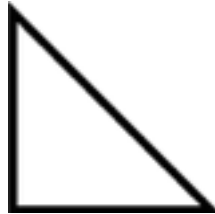


Video 4

Problem:



Solution:

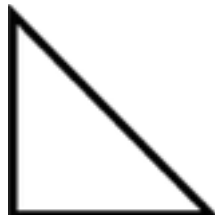


Video 5

Problem:



Solution:



Now create and solve your own problem. Please do not use any of the problems presented in the videos.

Problem:



Solution:

